

Tiger-Päckchen

Wie geht es weiter?

$2 \cdot 6 =$	<input type="text"/>
$3 \cdot 6 =$	<input type="text"/>
$4 \cdot 6 =$	<input type="text"/>
$5 \cdot \square =$	<input type="text"/>
$\square \cdot \square =$	<input type="text"/>

$10 \cdot 9 =$	<input type="text"/>
$8 \cdot 9 =$	<input type="text"/>
$6 \cdot 9 =$	<input type="text"/>
$\square \cdot \square =$	<input type="text"/>
$\square \cdot \square =$	<input type="text"/>

$1 \cdot 8 =$	<input type="text"/>
$3 \cdot 8 =$	<input type="text"/>
$5 \cdot 8 =$	<input type="text"/>
$\square \cdot \square =$	<input type="text"/>
$\square \cdot \square =$	<input type="text"/>

$10 \cdot 4 =$	<input type="text"/>
$8 \cdot 4 =$	<input type="text"/>
$6 \cdot 4 =$	<input type="text"/>
$\square \cdot \square =$	<input type="text"/>
$\square \cdot \square =$	<input type="text"/>



$100 : 10 =$	<input type="text"/>
$90 : 10 =$	<input type="text"/>
$80 : 10 =$	<input type="text"/>
$\square : \square =$	<input type="text"/>
$\square : \square =$	<input type="text"/>

$5 : 5 =$	<input type="text"/>
$15 : 5 =$	<input type="text"/>
$25 : 5 =$	<input type="text"/>
$\square : \square =$	<input type="text"/>
$\square : \square =$	<input type="text"/>

$3 : 1 =$	<input type="text"/>
$9 : 3 =$	<input type="text"/>
$15 : 5 =$	<input type="text"/>
$\square : \square =$	<input type="text"/>
$\square : \square =$	<input type="text"/>

$10 : \square =$	5
$20 : \square =$	5
$30 : \square =$	5
$\square : \square =$	<input type="text"/>
$\square : \square =$	<input type="text"/>



Das kann ich schon 5

1

$$\begin{array}{r} 632 \\ + 262 \\ \hline \end{array}$$

$$\begin{array}{r} 487 \\ + 206 \\ \hline \end{array}$$

$$\begin{array}{r} 771 \\ + 185 \\ \hline \end{array}$$

$$\begin{array}{r} 420 \\ + 158 \\ + 276 \\ \hline \end{array}$$

$$\begin{array}{r} 458 \\ + 176 \\ + 149 \\ \hline \end{array}$$



2

Finde die fehlenden Ziffern.

$$\begin{array}{r} \square \square 21 \\ + 56 \square \\ \hline 7 \square 1 \end{array}$$

$$\begin{array}{r} 508 \\ + \square \square 6 \\ \hline \square 7 \square \end{array}$$

$$\begin{array}{r} 2 \square 6 \\ + \square 8 \square \\ \hline \square 55 \end{array}$$

$$\begin{array}{r} \square \square 6 \square \\ + 135 \\ \hline 4 \square 3 \end{array}$$

$$\begin{array}{r} 37 \square \\ + \square 98 \\ \hline 8 \square 0 \end{array}$$



3

Finde die Fehler und kreuze sie ein. Schreibe die Aufgabe richtig.



$$\begin{array}{r} 269 \\ + 213 \\ \hline 491 \end{array}$$

$$\begin{array}{r} \square \square \square \\ + \square \square \square \\ \hline \square \square \square \end{array}$$

$$\begin{array}{r} 559 \\ + 366 \\ \hline 915 \end{array}$$

$$\begin{array}{r} \square \square \square \\ + \square \square \square \\ \hline \square \square \square \end{array}$$



Multiplizieren üben

1 $7 \cdot 8 = \square$

$6 \cdot 3 = \square$

$4 \cdot 6 = \square$

$9 \cdot 7 = \square$

$\square \cdot 9 = 72$

$\square \cdot 10 = 70$

$\square \cdot 7 = 28$

$\square \cdot 4 = 36$

$3 \cdot \square = 12$

$8 \cdot \square = 64$

$5 \cdot \square = 20$

$6 \cdot \square = 36$

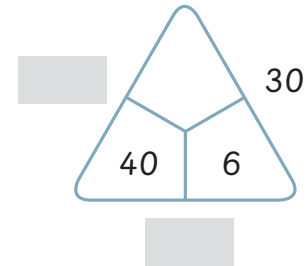
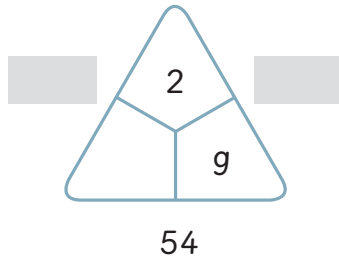
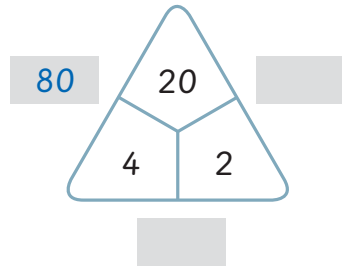
$\square \cdot 5 = 45$

$\square \cdot 7 = 35$

$\square \cdot 6 = 48$

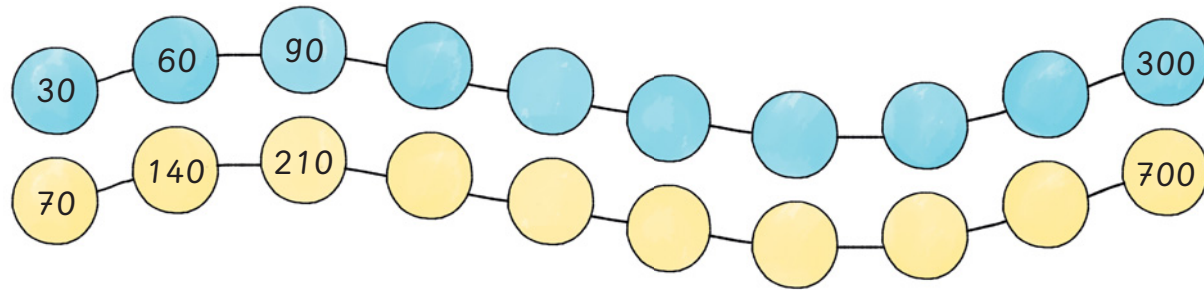
$\square \cdot 3 = 27$

2



3

Wie geht die Mal-Reihe weiter?



Dividieren üben

1

$24 : 4 =$ <input type="text"/>	$42 : 6 =$ <input type="text"/>	$16 :$ <input type="text"/> $= 4$	<input type="text"/> $: 3 = 5$
$21 : 3 =$ <input type="text"/>	$45 : 9 =$ <input type="text"/>	$40 :$ <input type="text"/> $= 8$	<input type="text"/> $: 9 = 4$
$8 : 2 =$ <input type="text"/>	$56 : 7 =$ <input type="text"/>	$12 :$ <input type="text"/> $= 2$	<input type="text"/> $: 6 = 5$


2

$280 : 4 =$ <input type="text"/>	$120 : 6 =$ <input type="text"/>	$350 :$ <input type="text"/> $= 70$	<input type="text"/> $: 10 = 40$
$490 : 7 =$ <input type="text"/>	$360 : 9 =$ <input type="text"/>	$140 :$ <input type="text"/> $= 20$	<input type="text"/> $: 8 = 70$
$270 : 3 =$ <input type="text"/>	$320 : 8 =$ <input type="text"/>	$480 :$ <input type="text"/> $= 80$	<input type="text"/> $: 6 = 60$

3 Wie geht es weiter?

$10 : 2 =$ <input type="text"/>
$20 : 4 =$ <input type="text"/>
$30 : 6 =$ <input type="text"/>
$40 :$ <input type="text"/> $=$ <input type="text"/>
<input type="text"/> $: $ <input type="text"/> $=$ <input type="text"/>

$100 : 10 =$ <input type="text"/>
$64 : 8 =$ <input type="text"/>
$36 : 6 =$ <input type="text"/>
<input type="text"/> $: $ <input type="text"/> $=$ <input type="text"/>
<input type="text"/> $: $ <input type="text"/> $=$ <input type="text"/>



$63 : 9 =$ <input type="text"/>
$48 : 8 =$ <input type="text"/>
$35 : 7 =$ <input type="text"/>
<input type="text"/> $: $ <input type="text"/> $=$ <input type="text"/>
<input type="text"/> $: $ <input type="text"/> $=$ <input type="text"/>

$12 :$ <input type="text"/> $= 2$
$20 :$ <input type="text"/> $= 4$
$24 :$ <input type="text"/> $= 6$
<input type="text"/> $: $ <input type="text"/> $=$ <input type="text"/>
<input type="text"/> $: $ <input type="text"/> $=$ <input type="text"/>



Schriftliches Subtrahieren ohne Übertrag

Subtrahiere schriftlich.

	H	Z	E
	8	6	3
-	5	4	0
<hr/>			

	H	Z	E
	9	7	9
-	1	1	3
<hr/>			

	H	Z	E
	5	3	4
-	4	0	2
<hr/>			

	H	Z	E
	4	6	7
-	3	2	3
<hr/>			

	H	Z	E
	7	4	2
-	2	1	1
<hr/>			

	H	Z	E
	6	2	1
-	4	1	1
<hr/>			

	H	Z	E
	5	6	5
-	3	2	5
<hr/>			

	H	Z	E
	8	4	6
-	4	0	5
<hr/>			

	H	Z	E
	8	0	4
-	5	0	3
<hr/>			

	H	Z	E
	3	8	7
-	1	4	2
<hr/>			

	H	Z	E
	7	7	5
-	1	2	1
<hr/>			

	H	Z	E
	4	4	6
-	2	2	3
<hr/>			

	H	Z	E
	5	7	9
-	2	6	1
<hr/>			

	H	Z	E
	7	2	8
-	6	1	4
<hr/>			



Schriftliches Subtrahieren mit Übertrag

Subtrahiere schriftlich.

H	Z	E
6	6	5
-	3	3
<hr/>		

H	Z	E
4	6	3
-	2	0
<hr/>		

H	Z	E
5	6	2
-	1	5
<hr/>		

H	Z	E
2	7	7
-	1	8
<hr/>		

H	Z	E
3	6	8
-		9
<hr/>		

H	Z	E
7	1	5
-	3	5
<hr/>		

H	Z	E
8	5	3
-	1	0
<hr/>		

H	Z	E
5	1	9
-	3	7
<hr/>		

H	Z	E
8	5	3
-	4	1
<hr/>		

H	Z	E
7	4	2
-	1	6
<hr/>		

H	Z	E
7	4	7
-	4	9
<hr/>		

H	Z	E
8	6	1
-	5	3
<hr/>		

H	Z	E
5	4	4
-	4	7
<hr/>		



Schriftliches Subtrahieren mit Übertrag


Subtrahiere schriftlich.

H	Z	E	
7	1	1	
-	1	7	8
<hr/>			

H	Z	E	
5	4	8	
-	4	5	9
<hr/>			

H	Z	E	
6	2	4	
-	2	4	5
<hr/>			

H	Z	E	
8	2	0	
-	4	5	7
<hr/>			



H	Z	E	
2	2	4	
-		4	7
<hr/>			

H	Z	E	
4	6	0	
-	1	6	1
<hr/>			

H	Z	E	
3	2	1	
-	2	6	6
<hr/>			

H	Z	E	
8	4	0	
-	3	8	3
<hr/>			

H	Z	E	
8	0	1	
-	1	1	7
<hr/>			

H	Z	E	
5	3	1	
-		7	6
<hr/>			

H	Z	E	
9	0	1	
-	6	3	3
<hr/>			

H	Z	E	
6	4	0	
-	5	7	8
<hr/>			

H	Z	E	
7	1	5	
-	4	1	7
<hr/>			

H	Z	E	
7	5	3	
-	4	8	4
<hr/>			



Schriftliches Subtrahieren üben

1 Finde die fehlenden Ziffern.

$$\begin{array}{r} 844 \\ - \\ \hline 224 \end{array}$$

$$\begin{array}{r} \\ - 202 \\ \hline 414 \end{array}$$

$$\begin{array}{r} 63 \\ - 51 \\ \hline 17 \end{array}$$

$$\begin{array}{r} 38 \\ - 33 \\ \hline 36 \end{array}$$

$$\begin{array}{r} 75 \\ - 186 \\ \hline 6 \end{array}$$

2 Finde die Fehler und kreise sie ein. Schreibe die Aufgabe richtig.



$$\begin{array}{r} 837 \\ - 324 \\ \hline 413 \end{array}$$

$$\begin{array}{r} 73 \\ - 235 \\ \hline 505 \end{array}$$

$$\begin{array}{r} 363 \\ - 109 \\ \hline 264 \end{array}$$

$$\begin{array}{r} 412 \\ - 224 \\ \hline 212 \end{array}$$

$$\begin{array}{r} \\ - \\ \hline \end{array}$$

$$\begin{array}{r} \\ - \\ \hline \end{array}$$

$$\begin{array}{r} \\ - \\ \hline \end{array}$$

$$\begin{array}{r} \\ - \\ \hline \end{array}$$



Schriftliches Subtrahieren üben

Subtrahiere schriftlich.

$$\begin{array}{r} 802 \\ - 303 \\ \hline \end{array}$$

$$\begin{array}{r} 731 \\ - 647 \\ \hline \end{array}$$

$$\begin{array}{r} 433 \\ - 49 \\ \hline \end{array}$$

$$\begin{array}{r} 631 \\ - 165 \\ \hline \end{array}$$

$$\begin{array}{r} 500 \\ - 353 \\ \hline \end{array}$$

$$\begin{array}{r} 972 \\ - 533 \\ \hline \end{array}$$

$$\begin{array}{r} 553 \\ - 288 \\ \hline \end{array}$$

$$\begin{array}{r} 731 \\ - 639 \\ \hline \end{array}$$

$$\begin{array}{r} 836 \\ - 138 \\ \hline \end{array}$$

$$\begin{array}{r} 355 \\ - 167 \\ \hline \end{array}$$

$$\begin{array}{r} 831 \\ - 283 \\ \hline \end{array}$$

$$\begin{array}{r} 422 \\ - 78 \\ \hline \end{array}$$

$$\begin{array}{r} 537 \\ - 491 \\ \hline \end{array}$$

$$\begin{array}{r} 488 \\ - 199 \\ \hline \end{array}$$

$$\begin{array}{r} 314 \\ - 164 \\ \hline \end{array}$$



Addieren und Subtrahieren mit Kommazahlen

1 Rechne zuerst einen Überschlag, löse dann schriftlich.

Ü: $130 \text{ €} + 310 \text{ €} = 440 \text{ €}$

	1	2	5	,	5	0	€
+	3	0	8	,	3	5	€
<hr/>							

Ü: _____

	4	9	9	,	9	5	€
+	2	5	6	,	6	0	€
<hr/>							



Ü: _____

	3	5	6	,	2	0	€
+	1	8	4	,	7	5	€
<hr/>							

Ü: _____

	4	8	5	,	5	5	€
-	2	6	1	,	2	5	€
<hr/>							



Ü: _____

	6	1	7	,	5	0	€
-	3	7	2	,	3	8	€
<hr/>							

Ü: _____

	5	0	0	,	0	0	€
-	1	4	4	,	6	6	€
<hr/>							



2 Schreibe alle Beträge als Kommazahlen und rechne schriftlich.

$248 \text{ € } 60 \text{ ct} + 367,50 \text{ €}$

$654,80 \text{ €} - 473 \text{ € } 95 \text{ ct}$



O	A	I	U	E	H	D	P	M	N	R	S	K	L	T	B
30	50	70	80	300	320	335	345	360	375	400	420	455	480	490	500

$360 + 140 = 500$	$7 \cdot 70 =$	$6 \cdot 70 =$
$250 : 5 =$	$289 + 31 =$	$535 - 80 =$
$7 \cdot 60 =$	$347 - 47 =$	$720 : 9 =$
$430 - 360 =$	$180 + 155 =$	$285 + 170 =$
$6 \cdot 80 =$	$2 \cdot 200 =$	$240 : 3 =$
$215 - 145 =$	$450 : 9 =$	$366 - 21 =$
$560 : 7 =$	$724 - 244 =$	$213 + 132 =$
$385 + 35 =$	$6 \cdot 50 =$	$3 \cdot 100 =$
$615 - 160 =$	$4 \cdot 90 =$	$232 + 248 =$
$400 : 8 =$	$90 : 3 =$	$410 - 35 =$



Trage die Buchstaben in der Reihenfolge der Aufgaben ein. Wie heißt der Lösungssatz?

Die **B** -

in **A** hat neun bunte



Rechnen mit Kilometern und Metern

1 $350 \text{ m} + \underline{\hspace{2cm}} = 1 \text{ km}$ $615 \text{ m} + \underline{\hspace{2cm}} = 1 \text{ km}$ $\frac{1}{4} \text{ km} + \underline{\hspace{2cm}} = 1 \text{ km}$
 $630 \text{ m} + \underline{\hspace{2cm}} = 1 \text{ km}$ $285 \text{ m} + \underline{\hspace{2cm}} = 1 \text{ km}$ $\frac{1}{2} \text{ km} + \underline{\hspace{2cm}} = 1 \text{ km}$
 $780 \text{ m} + \underline{\hspace{2cm}} = 1 \text{ km}$ $25 \text{ m} + \underline{\hspace{2cm}} = 1 \text{ km}$ $\frac{3}{4} \text{ km} + \underline{\hspace{2cm}} = 1 \text{ km}$

2 $70 \text{ m} + \underline{\hspace{2cm}} = \frac{1}{4} \text{ km}$ $280 \text{ m} + \underline{\hspace{2cm}} = \frac{1}{2} \text{ km}$ $460 \text{ m} + \underline{\hspace{2cm}} = \frac{3}{4} \text{ km}$
 $195 \text{ m} + \underline{\hspace{2cm}} = \frac{1}{4} \text{ km}$ $305 \text{ m} + \underline{\hspace{2cm}} = \frac{1}{2} \text{ km}$ $372 \text{ m} + \underline{\hspace{2cm}} = \frac{3}{4} \text{ km}$
 $225 \text{ m} + \underline{\hspace{2cm}} = \frac{1}{4} \text{ km}$ $146 \text{ m} + \underline{\hspace{2cm}} = \frac{1}{2} \text{ km}$ $54 \text{ m} + \underline{\hspace{2cm}} = \frac{3}{4} \text{ km}$

3 Setze $>$, $<$, $=$ oder passende Zahlen ein.

$230 \text{ m} \bigcirc 203 \text{ m}$ $249 \text{ m} \bigcirc \frac{1}{4} \text{ km}$ $\frac{1}{4} \text{ km} \bigcirc 450 \text{ m}$ $100 \text{ m} > \underline{\hspace{2cm}}$
 $545 \text{ m} \bigcirc 545 \text{ m}$ $501 \text{ m} \bigcirc \frac{1}{2} \text{ km}$ $\frac{1}{2} \text{ km} \bigcirc 500 \text{ m}$ $710 \text{ m} < \underline{\hspace{2cm}}$
 $906 \text{ m} \bigcirc 609 \text{ m}$ $750 \text{ m} \bigcirc \frac{3}{4} \text{ km}$ $\frac{3}{4} \text{ km} \bigcirc 650 \text{ m}$ $287 \text{ m} = \underline{\hspace{2cm}}$

4 $380 \text{ m} + 270 \text{ m} = \underline{\hspace{2cm}}$ $550 \text{ m} + 85 \text{ m} = \underline{\hspace{2cm}}$ $\frac{1}{2} \text{ km} + \frac{1}{2} \text{ km} = \underline{\hspace{2cm}}$
 $530 \text{ m} + 460 \text{ m} = \underline{\hspace{2cm}}$ $235 \text{ m} + 70 \text{ m} = \underline{\hspace{2cm}}$ $\frac{3}{4} \text{ km} + \frac{1}{4} \text{ km} = \underline{\hspace{2cm}}$
 $810 \text{ m} + 140 \text{ m} = \underline{\hspace{2cm}}$ $465 \text{ m} + 45 \text{ m} = \underline{\hspace{2cm}}$ $\frac{1}{2} \text{ km} + \frac{3}{4} \text{ km} = \underline{\hspace{2cm}}$

